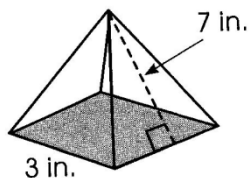


Name _____ Period _____

Geometry Unit 11 Worksheet #5 Surface Area of Pyramids

Find the lateral area, area of the base and surface area of the pyramid.

1.

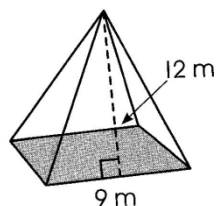


l.a. _____

B = _____

S.A. _____

2.

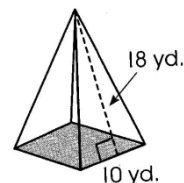


l.a. _____

B = _____

S.A. _____

3.



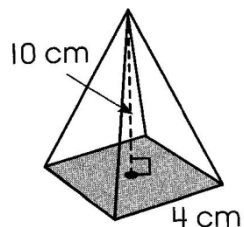
l.a. _____

B = _____

S.A. _____

For #4-6, find the slant height, lateral area, area of the base and surface area

4.



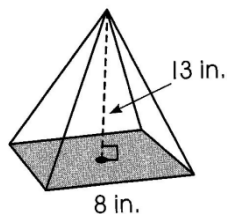
Slant height _____

l.a. _____

B _____

s.a. _____

5.



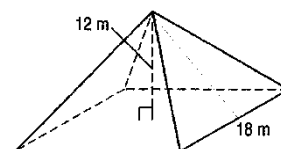
slant height _____

l.a. _____

B _____

s.a. _____

6.



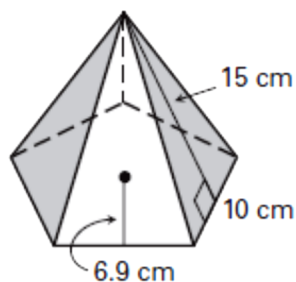
slant height _____

l.a. _____

B _____

s.a. _____

7.



l.a. _____

B _____

s.a. _____